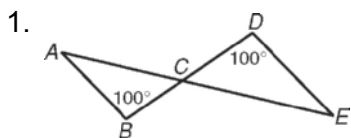
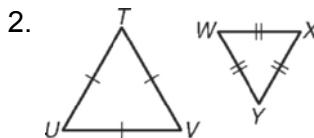


LESSON
7-3

Practice B
Triangle Similarity: AA, SSS, SAS

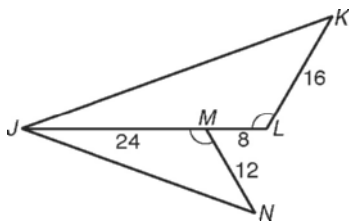
For Exercises 1 and 2, explain why the triangles are similar and write a similarity statement.



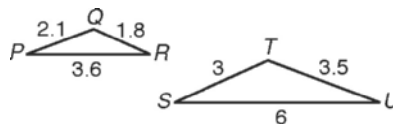


For Exercises 3 and 4, verify that the triangles are similar. Explain why.

3. $\triangle JLK$ and $\triangle JMN$



4. $\triangle PQR$ and $\triangle STU$



For Exercise 5, explain why the triangles are similar and find the stated length.

5. DE

