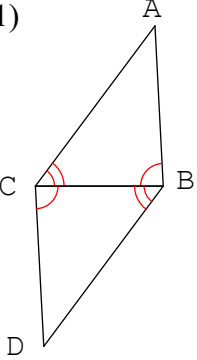
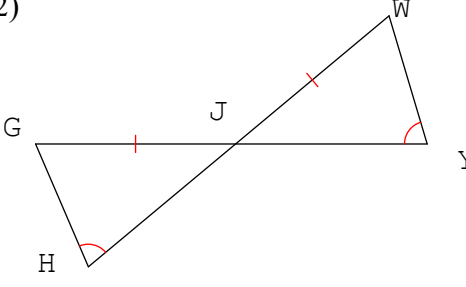


Recognizing Triangle Congruence

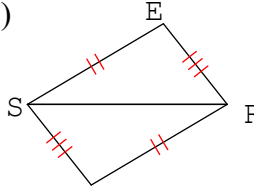
Which criteria, if any, can be used to show the triangles congruent? If congruent, then complete the congruence statement.

1) 

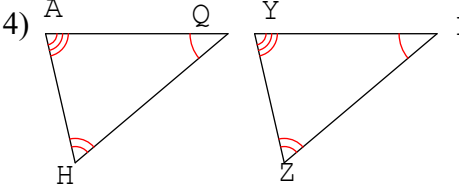
$\triangle ABC \cong \triangle \text{---}$

2) 

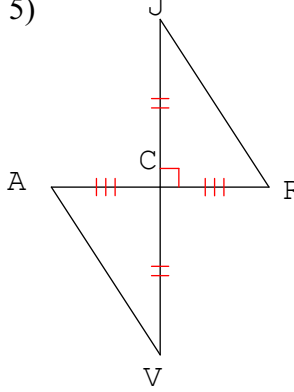
$\triangle JGH \cong \triangle \text{---}$

3) 

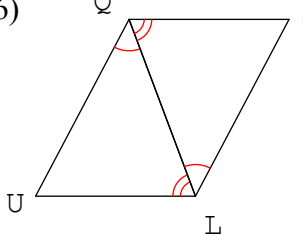
$\triangle ERS \cong \triangle \text{---}$

4) 

$\triangle AQH \cong \triangle \text{---}$

5) 

$\triangle ACV \cong \triangle \text{---}$

6) 

$\triangle QUL \cong \triangle \text{---}$