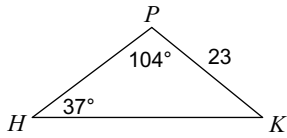


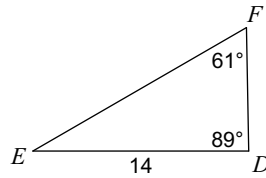
The Law of Sines; The Law of Cosines

Find each triangles missing sides and/or angles. Round sides to the nearest hundredth, angles to the nearest degree.

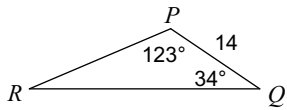
1)



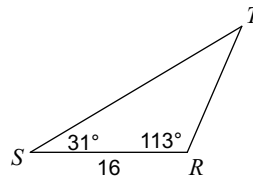
2)



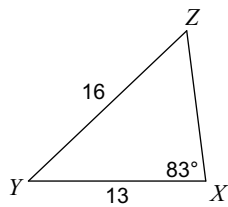
3)



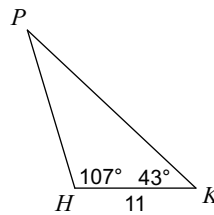
4)



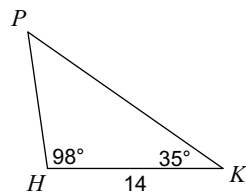
5)



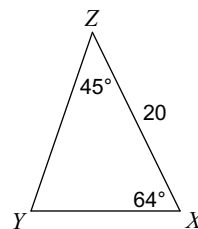
6)



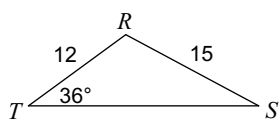
7)



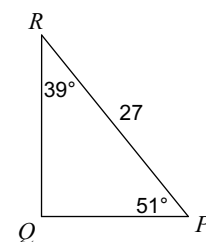
8)



9)

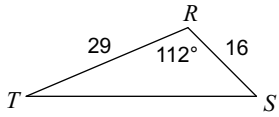


10)

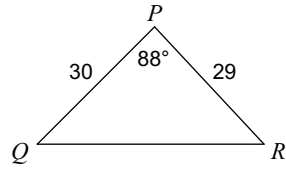


Find each triangles missing sides and/or angles. Round sides to the nearest hundredth, angles to the nearest degree.

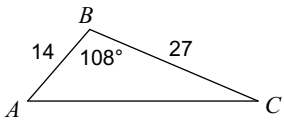
11)



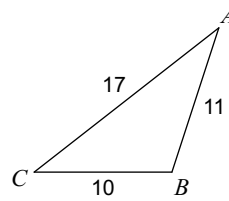
12)



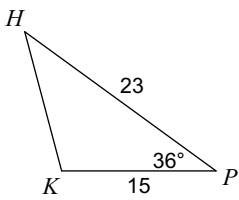
13)



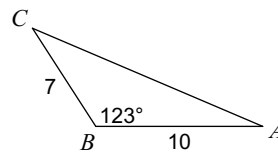
14)



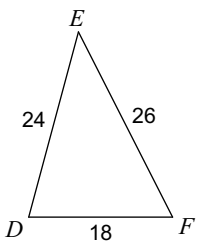
15)



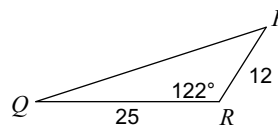
16)



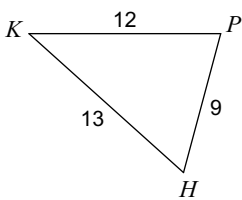
17)



18)



19)



20)

