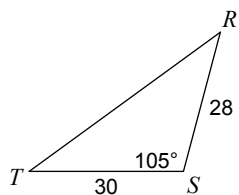


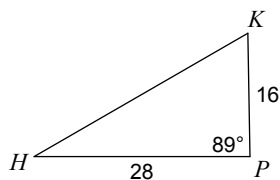
# Law of Sines and Cosines

Find each measurement indicated. Do work on separate paper!

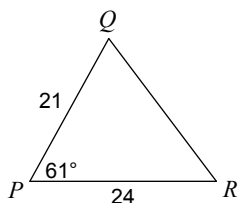
1) Find  $RT$



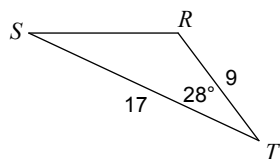
2) Find  $HK$



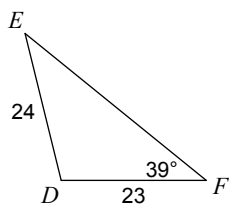
3) Find  $QR$



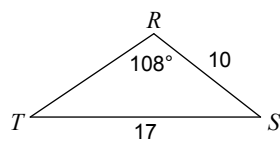
4) Find  $RS$



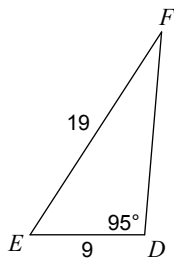
5) Find  $m\angle E$



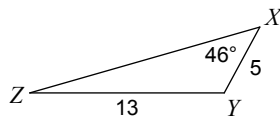
6) Find  $m\angle T$



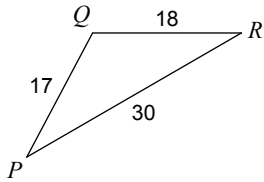
7) Find  $m\angle F$



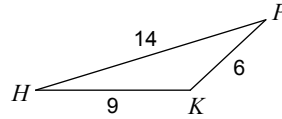
8) Find  $m\angle Z$



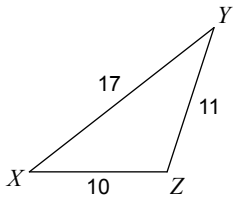
9) Find  $m\angle R$



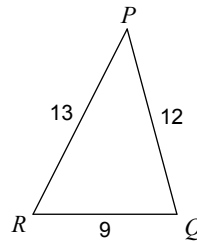
10) Find  $m\angle H$



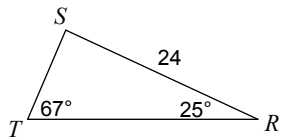
11) Find  $m\angle Y$



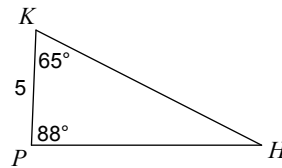
12) Find  $m\angle Q$



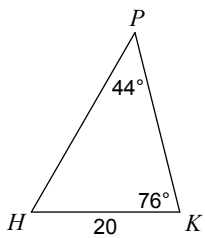
13) Find ST



14) Find HP



15) Find HP



16) Find QR

