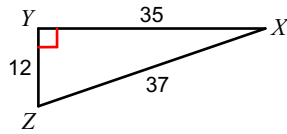


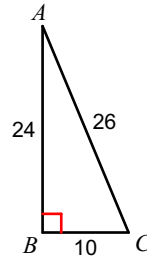
Identifying Trig Ratios

Find the value of each trigonometric ratio. Report answers as simplified fractions AND decimals to thousandths.

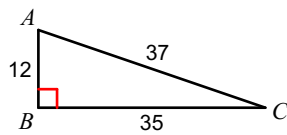
1) $\cos X$



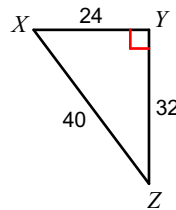
2) $\tan C$



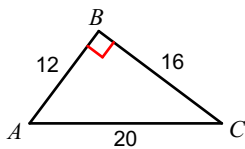
3) $\sin C$



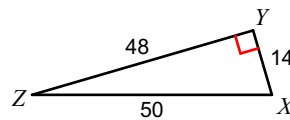
4) $\sin X$



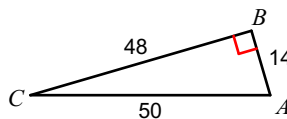
5) $\cos C$



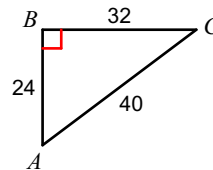
6) $\cos X$



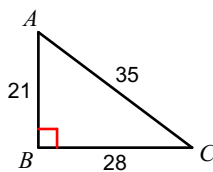
7) $\tan C$



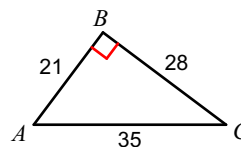
8) $\tan A$



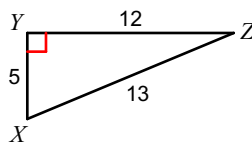
9) $\tan A$



10) $\sin C$



11) $\cos X$



12) $\sin X$

