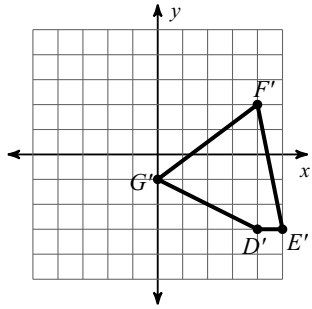
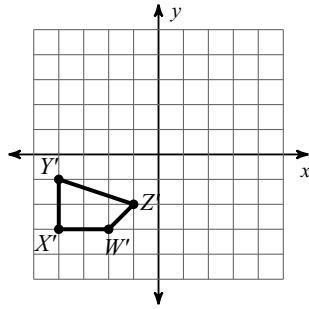


Answers to More Transformation Practice

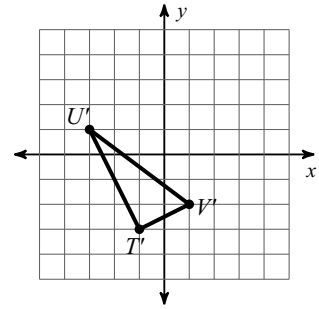
1)



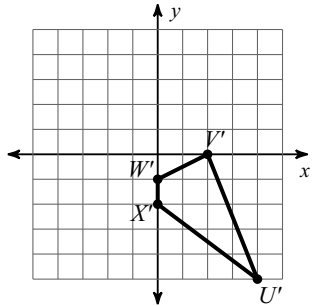
2)



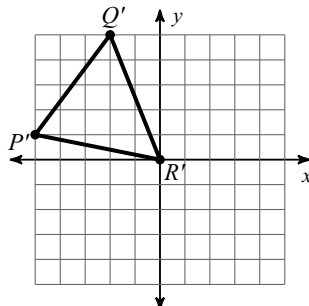
3)



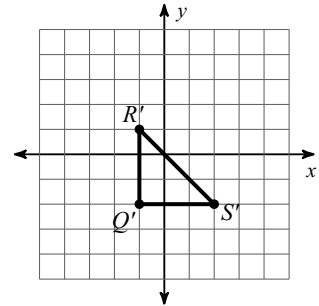
4)



5)



6)



7) rotation 180° about the origin

9) rotation 90° counterclockwise about the origin

11) translation: $(x, y) \rightarrow (x - 2, y + 3)$

8) reflection across the x-axis

10) translation: $(x, y) \rightarrow (x + 6, y - 3)$

12) reflection across $y = x$