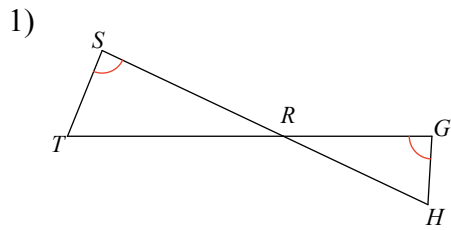
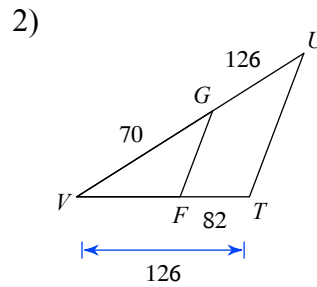


## Similar Triangle Criteria

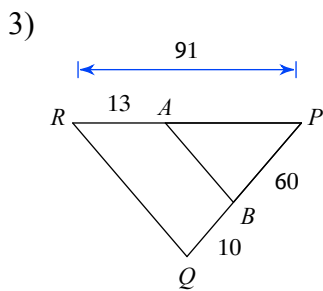
Are the triangles in each pair similar? If so, state how you know they are similar (SSS~, SAS~, or AA~) and complete the similarity statement.



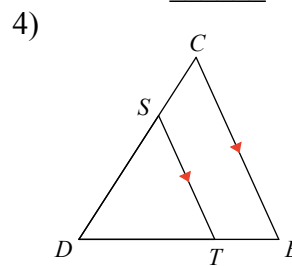
$\triangle RST \sim$  \_\_\_\_\_



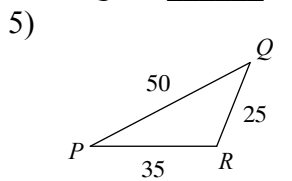
$\triangle VUT \sim$  \_\_\_\_\_



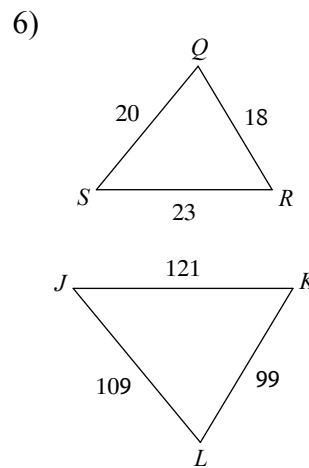
$\triangle PQR \sim$  \_\_\_\_\_



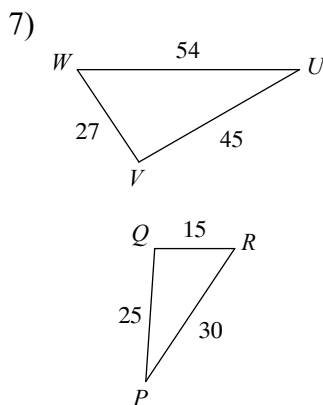
$\triangle DCB \sim$  \_\_\_\_\_



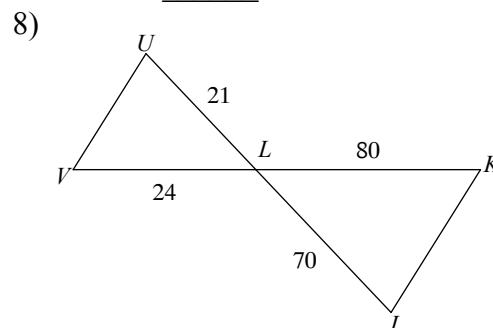
$\triangle FED \sim$  \_\_\_\_\_



$\triangle LKJ \sim$  \_\_\_\_\_



$\triangle UVW \sim$  \_\_\_\_\_



$\triangle LKJ \sim$  \_\_\_\_\_