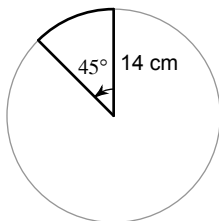


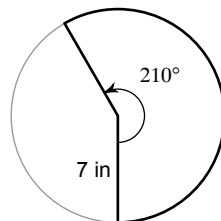
### Sector Area, Tangent/Secants

Find the area of each sector.

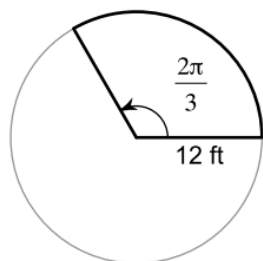
1)



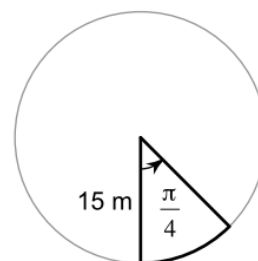
2)



3)

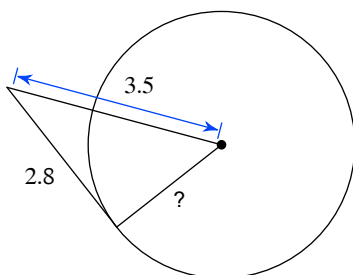


4)

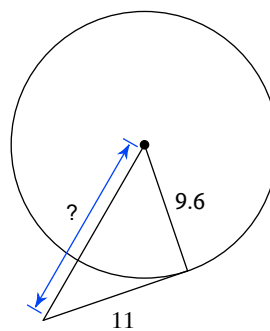


Find the segment length indicated. Assume that lines which appear to be tangent are tangent.

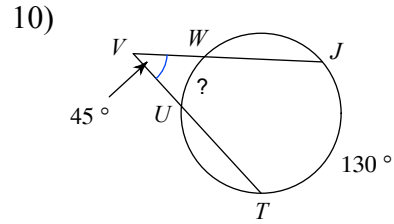
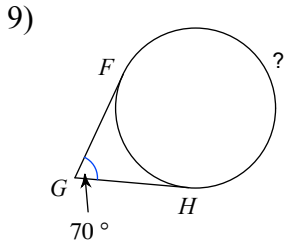
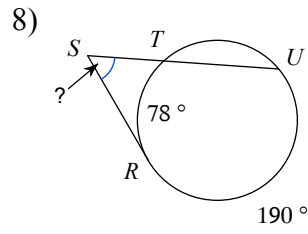
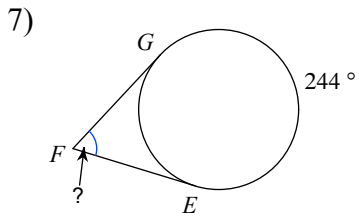
5)



6)



Find the measure of the arc or angle indicated. Assume that lines which appear tangent, are.



Find the perimeter of each polygon. Assume that lines which appear to be tangent are tangent.

